

Name : _____

Telling Time

5 minutes: S2

A) Read each clock, and write the time.

1)




2)



3)



4)

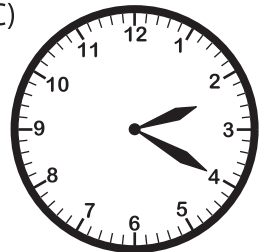


B) Choose the clock


Time : 2:20

www.mathworksheets4kids.com

C)



C) Choose the correct time shown by the clock.



A)

11:25

B)

11:15

C)

5:55