


Name : \_\_\_\_\_

## Telling Time


Half-Hourly: S2

A) Read each clock, and write the time.


1)





2)



3)



4)

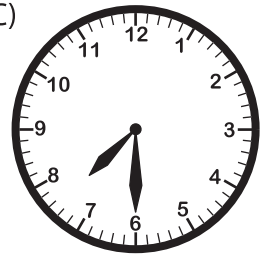


B) Choose the clock

Time : 8:30



C)



C) Choose the correct time shown by the clock.



A)

**9:30**

B)

**11:30**

C)

**10:30**

**PREVIEW**

Gain complete access to the largest collection of worksheets in all subjects!

Members, please log in to download this worksheet.

Not a member? Please sign up to gain complete access.

[www.mathworksheets4kids.com](http://www.mathworksheets4kids.com)