

Name : _____

Telling Time


Hourly: S3

A) Read each clock, and write the time.


1)





2)



3)



4)

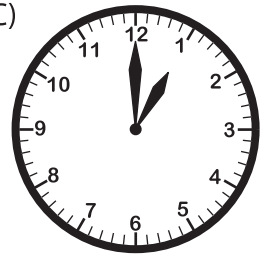


B) Choose the clock

Time : 11:00



C)



C) Choose the correct time shown by the clock.



A)

4:00

B)

3:00

C)

9:00

PREVIEW

Gain complete access to the largest collection of worksheets in all subjects!

Members, please log in to download this worksheet.

Not a member? Please sign up to gain complete access.

www.mathworksheets4kids.com