


Name : _____

Time - Standard Form


Half-hourly/Quarterly: S1

Write each time in standard form:


1) Quarter past three



2) Quarter to nine



3) Half past eight



4) Quarter past two

5) Quarter past six

6) Half past five

7) Quarter to five


8) Half past eleven

9) Quarter past ten


10) Quarter to four



11) Half past six



12) Quarter to two



PREVIEW

Gain complete access to the largest collection of worksheets in all subjects!

Members, please log in to download this worksheet.

Not a member? Please sign up to gain complete access.

www.mathworksheets4kids.com