


Name : _____

Time - Standard Form


Minutes: S1

Write each time in standard form:


1) Twenty-nine past three



2) Quarter past six



3) Nineteen to ten



4) Five to six

5) Half past ten


6) Five past two

7) Twenty past eleven


8) Four to four

9) Quarter to eleven


10) Seven past twelve



11) Seventeen past one



12) Twenty-nine past eight



PREVIEW

Gain complete access to the largest collection of worksheets in all subjects!

Members, please log in to download this worksheet.

Not a member? Please sign up to gain complete access.

www.mathworksheets4kids.com