


Time - Standard Form


Minutes: 52

Write each time in standard form:


1) Twenty to nine



2) Five to two



3) Ten past twelve



4) Half past seven

5) Ten to five

6) Twelve past eleven

7) Twenty two to one

8) Quarter past three

9) Twenty six past one


10) Twenty nine to ten



11) Quarter to six



12) Eighteen to four



PREVIEW

Gain complete access to the largest collection of worksheets in all subjects!

Members, please log in to download this worksheet.

Not a member? Please sign up to gain complete access.

www.mathworksheets4kids.com