


**Time - Standard Form**


Minutes: 53

Write each time in standard form:


1) Half past two



2) Ten past ten



3) Twenty past five



4) Quarter past

5) Twenty to se

6) Five to fou

7) Nineteen past

8) Quarter to t

9) Twenty seven t

10) Sixteen to eight



11) Twelve past four



12) Twenty past eleven



**PREVIEW**

Gain complete access to the largest collection of worksheets in all subjects!

Members, please log in to download this worksheet.

Not a member? Please sign up to gain complete access.

[www.mathworksheets4kids.com](http://www.mathworksheets4kids.com)