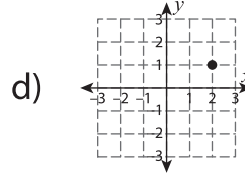
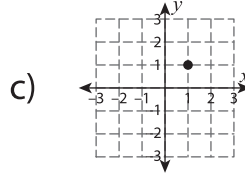
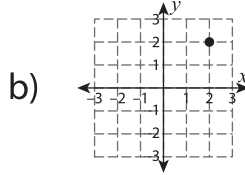
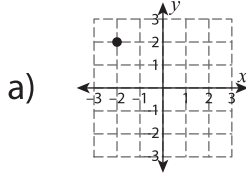
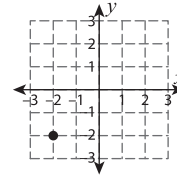
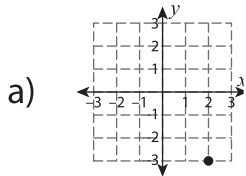
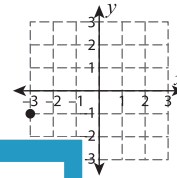


Multiple Choice

1) What will be the new position of the given point after reflection across the line $y = -x$?



2) What will be the new position of the given point after reflection across the line $x = -1$?



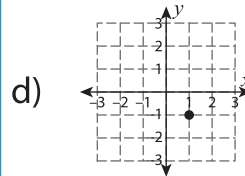
PREVIEW

Gain complete access to the largest collection of worksheets in all subjects!

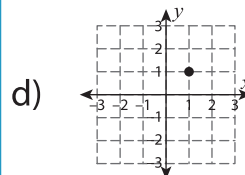
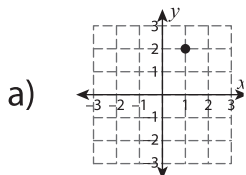
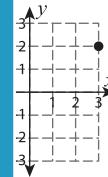
Members, please log in to download this worksheet.

Not a member? Please sign up to gain complete access.

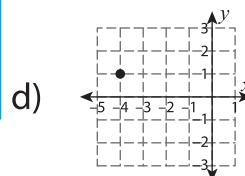
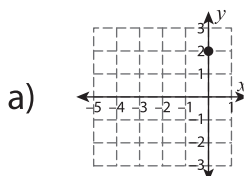
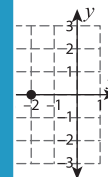
www.mathworksheets4kids.com



3) What will be the reflection across the line $y = 1$?



4) What will be the reflection across the line $x = 1$?



5) What will be the new position of the given point after reflection across the y -axis?

