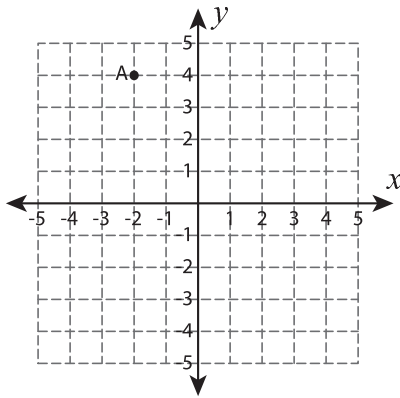


Reflect the point

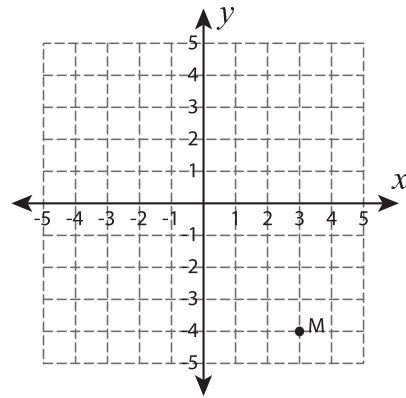
Sheet 1

Graph the new position of each point after the given reflection.

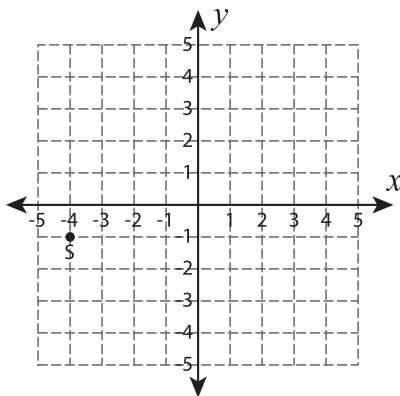
- 1) Reflection across the line
- $y = 2$



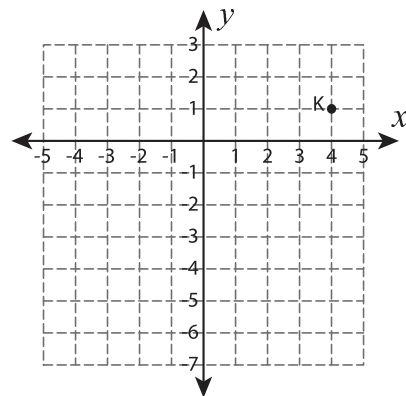
- 2) Reflection across the y-axis



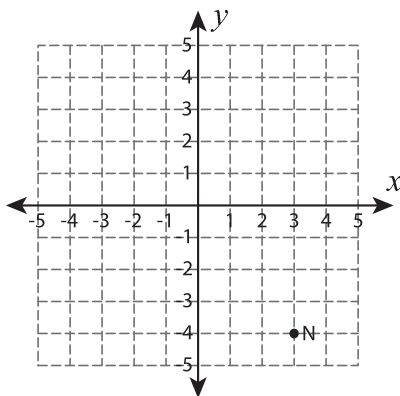
- 3) Reflection across the line
- $x = -1$



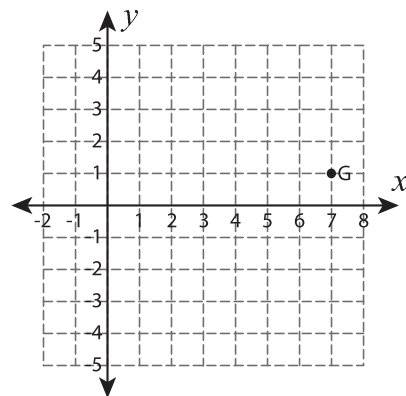
- 4) Reflection across the line
- $y = -3$



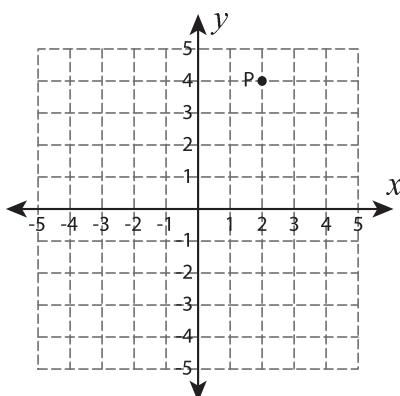
- 5) Reflection across the line
- $y = x$



- 6) Reflection across the line
- $x = 4$



- 7) Reflection across the line
- $x = 3$



- 8) Reflection across the line
- $y = -5$

