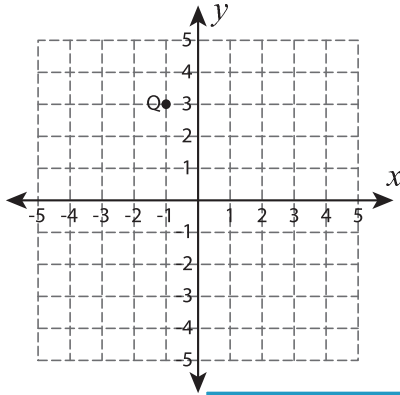


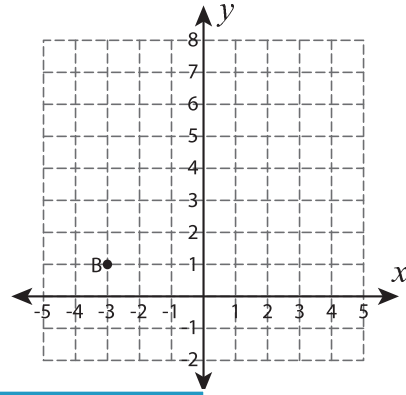
Reflect the point

Graph the new position of each point after the given reflection.

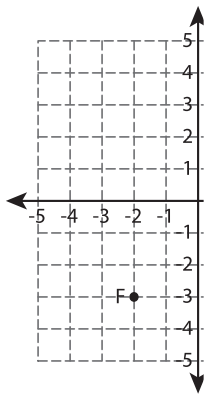
1) Reflection across the line $x = -3$



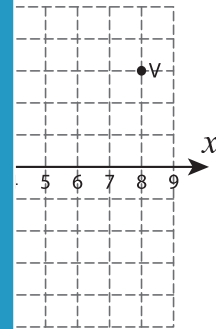
2) Reflection across the line $y = 3$



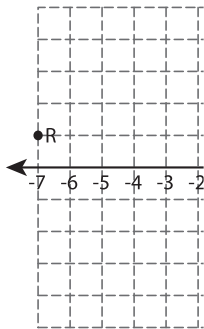
3) Reflection across the line $x = 5$



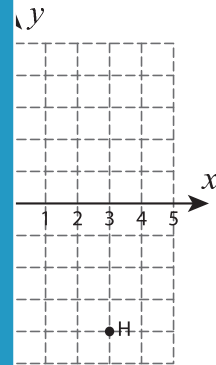
the line $x = 5$



5) Reflection across the line $y = -2$



the line $y = -2$



PREVIEW

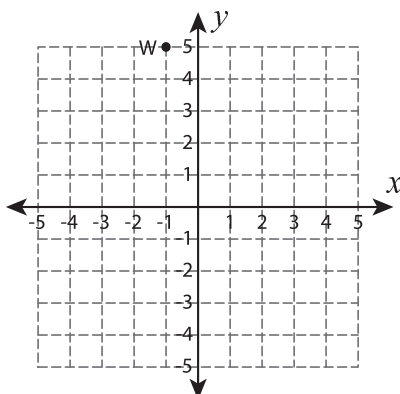
Gain complete access to the largest collection of worksheets in all subjects!

Members, please log in to download this worksheet.

Not a member? Please sign up to gain complete access.

www.mathworksheets4kids.com

7) Reflection across the line $y = 4$



8) Reflection across the line $x = 1$

