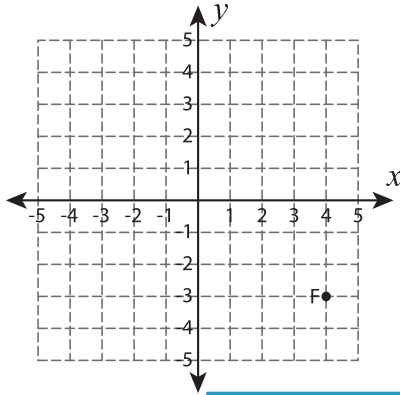


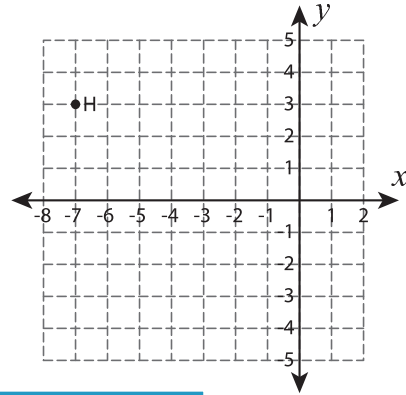
Reflect the point

Graph the new position of each point after the given reflection.

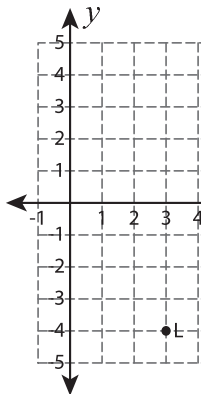
1) Reflection across the x-axis



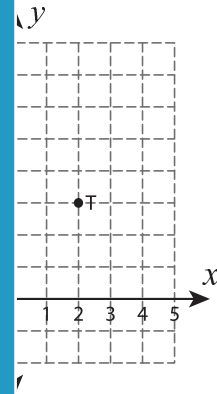
2) Reflection across the line $x = -4$



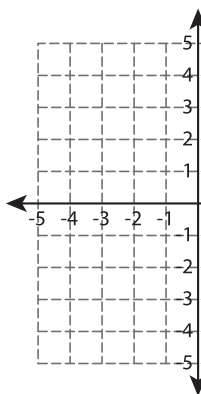
3) Reflection across the line $y = 5$



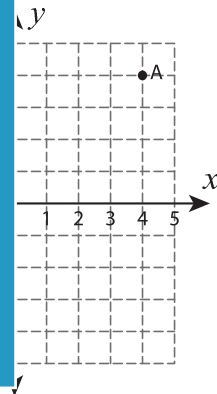
the line $y = 5$



5) Reflection across the line $x = 2$



the line $x = 2$



PREVIEW

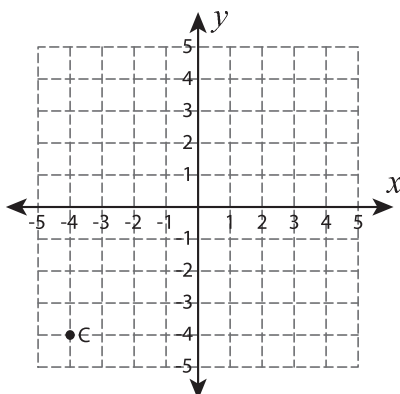
Gain complete access to the largest collection of worksheets in all subjects!

Members, please log in to download this worksheet.

Not a member? Please sign up to gain complete access.

www.mathworksheets4kids.com

7) Reflection across the line $x = -2$



8) Reflection across the line $y = 1$

