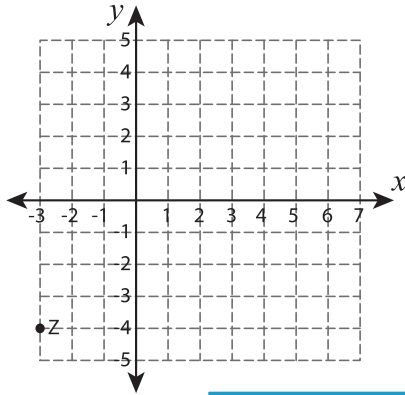


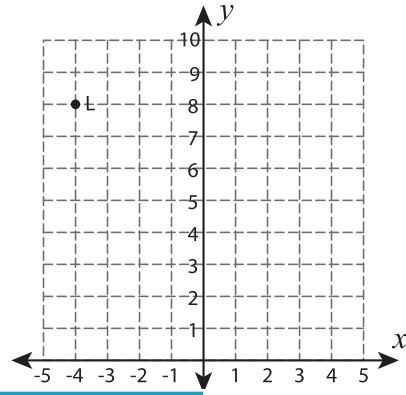
## Reflect the point

Graph the new position of each point after the given reflection.


1) Reflection across the line  $x = 1$



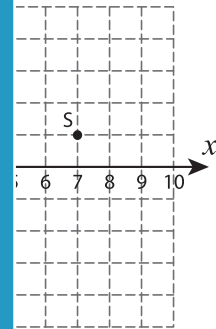
2) Reflection across the line  $y = 9$



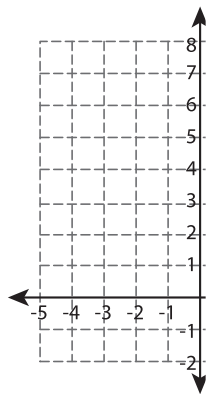
3) Reflection across the line  $x = 8$



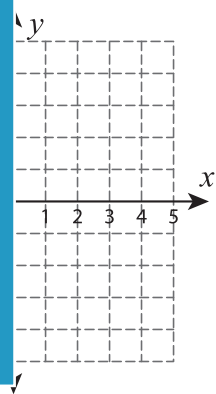
the line  $x = 8$



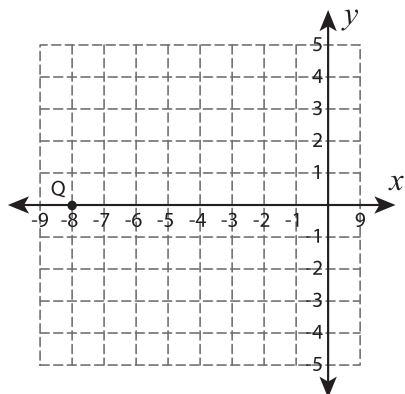
5) Reflection across the line  $y = -x$



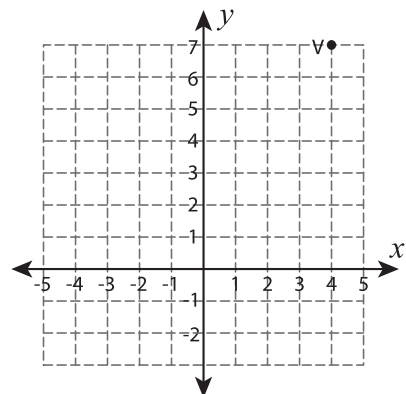
the line  $y = -x$



7) Reflection across the line  $x = -6$



8) Reflection across the line  $y = 3$



# PREVIEW

Gain complete access to the largest collection of worksheets in all subjects!

Members, please log in to download this worksheet.

Not a member? Please sign up to gain complete access.

www.mathworksheets4kids.com