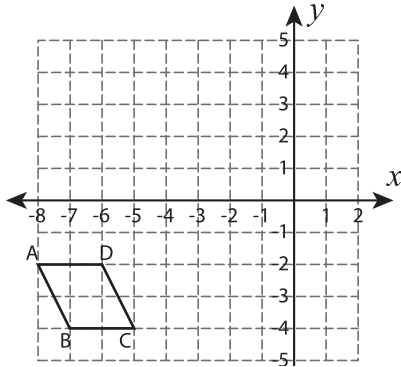


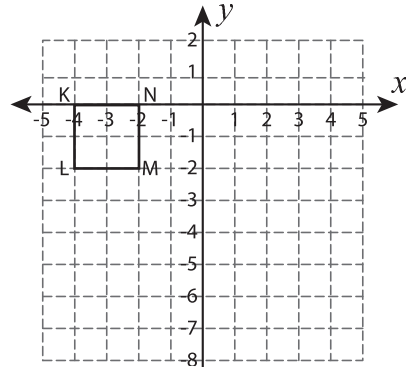
Reflect the Quadrilaterals

Graph the image of each quadrilateral after the given reflection.

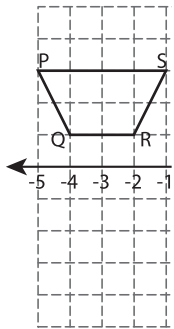
1) Reflection across the line $x = -5$



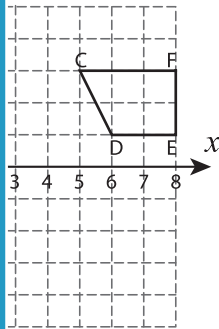
2) Reflection across the line $y = -4$



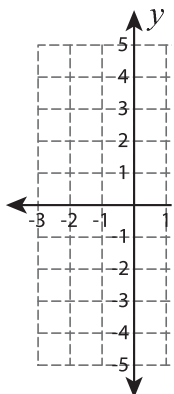
3) Reflection across



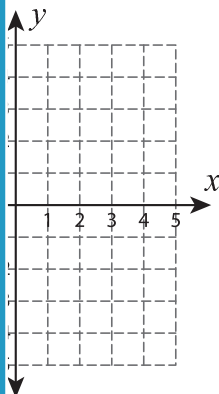
the line $x = 3$



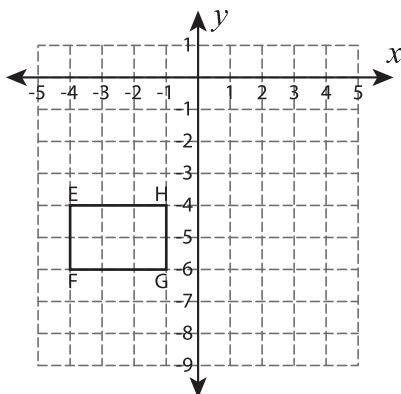
5) Reflection across



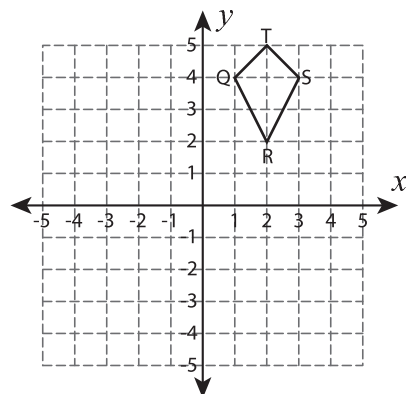
the line $y = x$



7) Reflection across the line $y = -3$



8) Reflection across the line $x = -1$



PREVIEW

Gain complete access to the largest collection of worksheets in all subjects!

Members, please log in to download this worksheet.

Not a member? Please sign up to gain complete access.

www.mathworksheets4kids.com