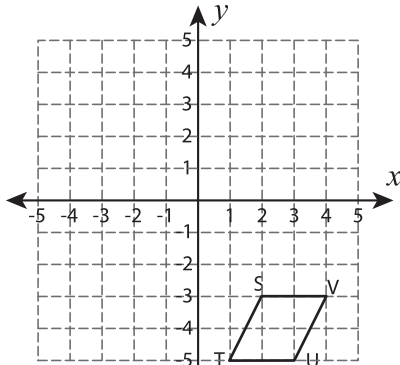


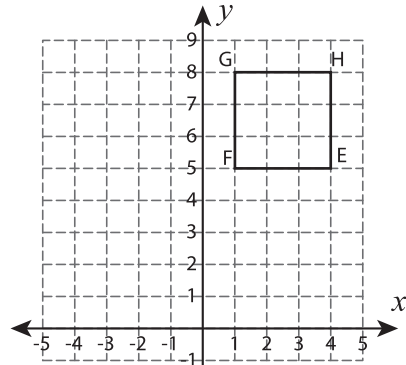
# Reflect the Quadrilaterals

Graph the image of each quadrilateral after the given reflection.

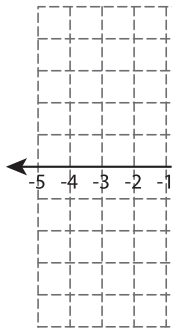
1) Reflection across the line  $y = -1$



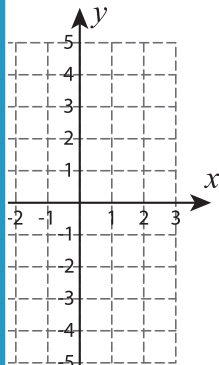
2) Reflection across the line  $y = 5$



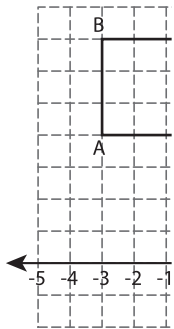
3) Reflection across



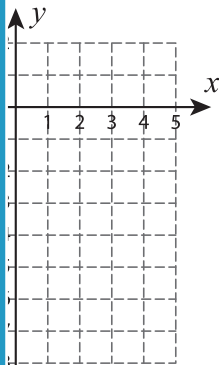
the line  $x = -2$



5) Reflection across



the line  $y = -4$



## PREVIEW

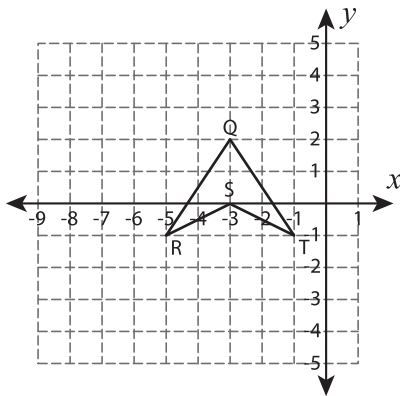
Gain complete access to the largest collection of worksheets in all subjects!

Members, please log in to download this worksheet.

Not a member? Please sign up to gain complete access.

[www.mathworksheets4kids.com](http://www.mathworksheets4kids.com)

7) Reflection across the line  $x = -5$



8) Reflection across the line  $y = x$

