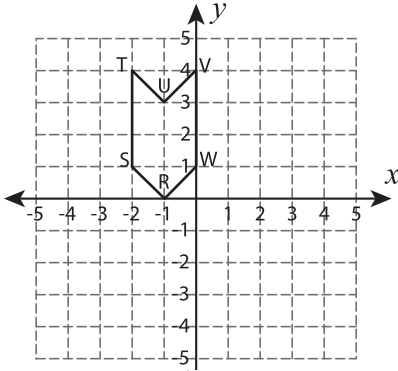


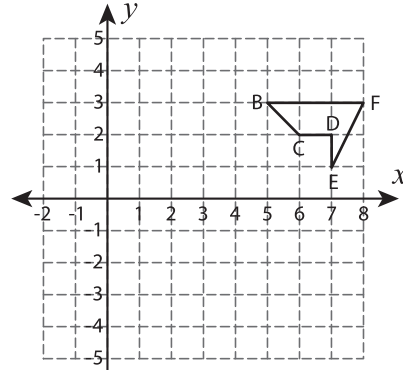
Reflect the Shapes

Graph the image of each shape after the given reflection.

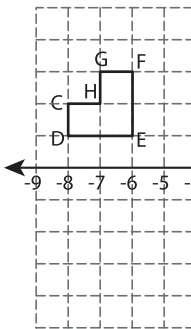
1) Reflection across the line $y = x$



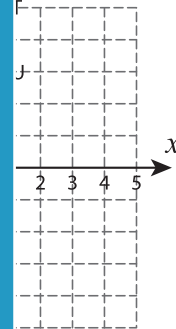
2) Reflection across the line $x = 4$



3) Reflection across



the x-axis



PREVIEW

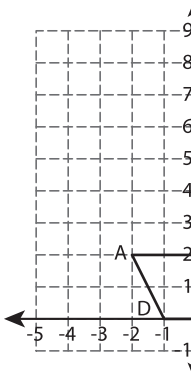
Gain complete access to the largest collection of worksheets in all subjects!

Members, please log in to download this worksheet.

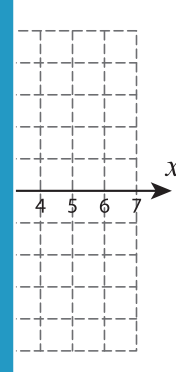
Not a member? Please sign up to gain complete access.

www.mathworksheets4kids.com

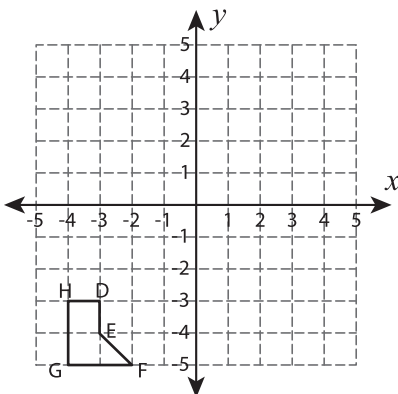
5) Reflection across



the line $x = 2$



7) Reflection across the line $y = -1$



8) Reflection across the line $y = -4$

