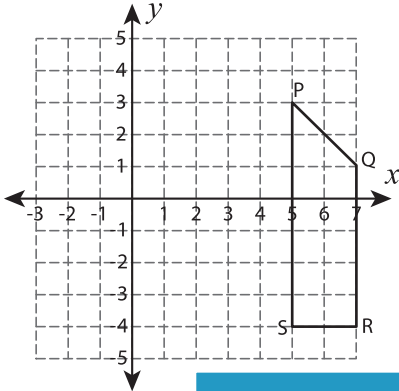


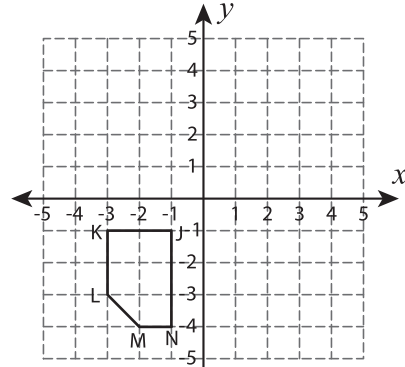
# Reflect the Shapes

Graph the image of each shape after the given reflection.

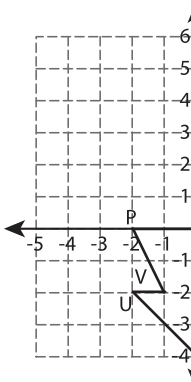
1) Reflection across the line  $x = 3$



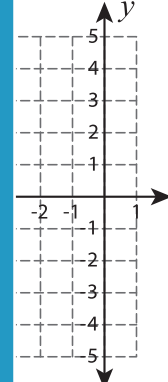
2) Reflection across the line  $y = -x$



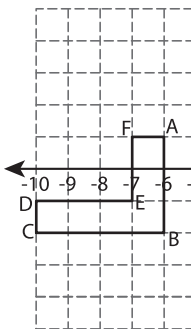
3) Reflection across



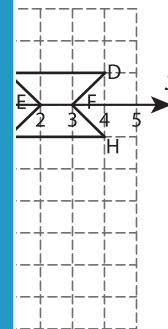
line  $x = -4$



5) Reflection across



line  $y = -3$



# PREVIEW

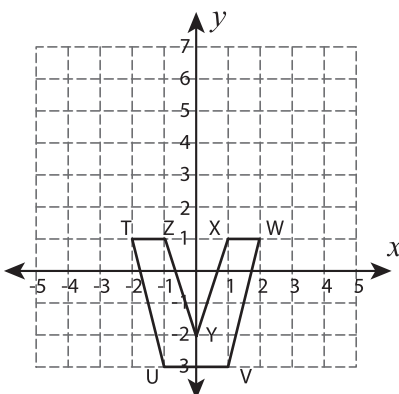
Gain complete access to the largest collection of worksheets in all subjects!

Members, please log in to download this worksheet.

Not a member? Please sign up to gain complete access.

[www.mathworksheets4kids.com](http://www.mathworksheets4kids.com)

7) Reflection across the line  $y = 2$



8) Reflection across the y-axis

