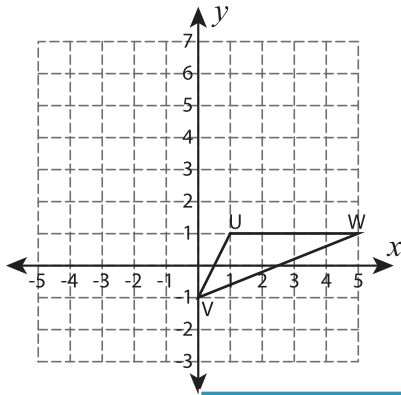


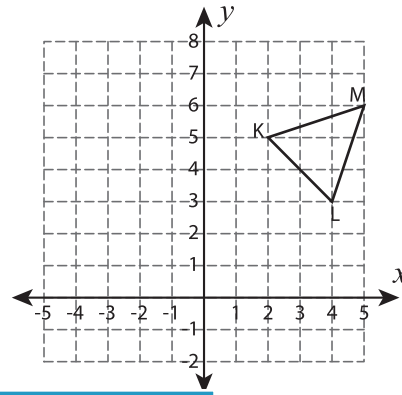
# Reflect the Triangles

Graph the image of each triangle after the given reflection.

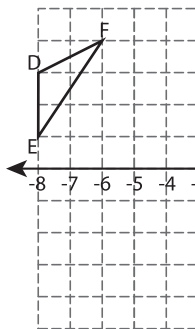
1) Reflection across the line  $y = 3$



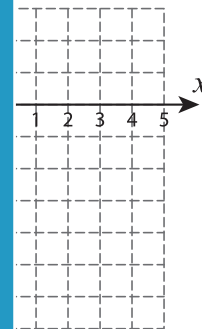
2) Reflection across the line  $x = 1$



3) Reflection across



the line  $y = -4$



## PREVIEW

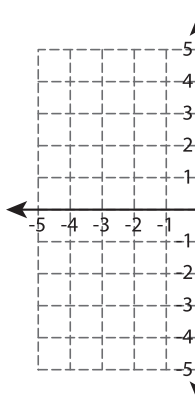
Gain complete access to the largest collection of worksheets in all subjects!

Members, please log in to download this worksheet.

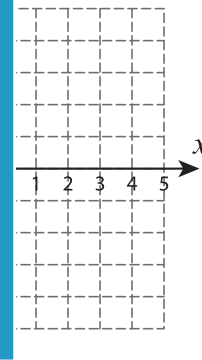
Not a member? Please sign up to gain complete access.

[www.mathworksheets4kids.com](http://www.mathworksheets4kids.com)

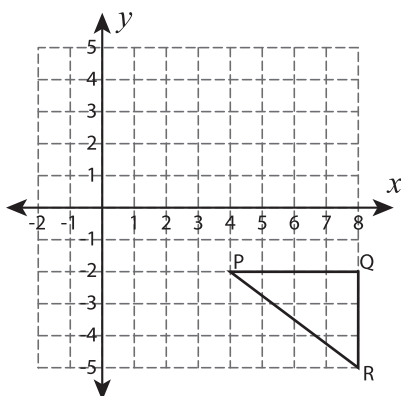
5) Reflection across



the y-axis



7) Reflection across the line  $x = 4$



8) Reflection across the line  $y = -x$

