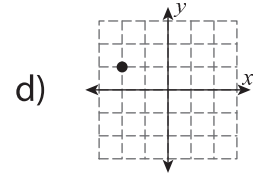
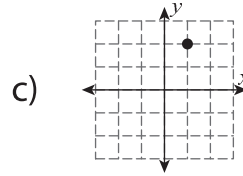
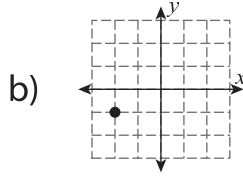
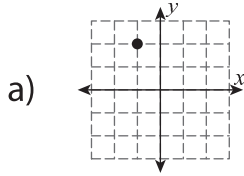
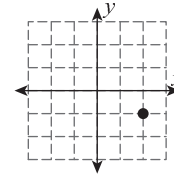
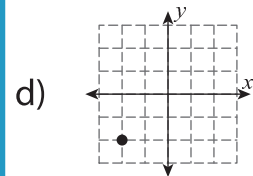
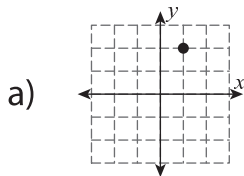
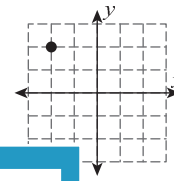


Multiple Choice

1) What will be the new position of the given point after rotating 180° about the origin?



2) What will be the new position of the given point after rotating 90° clockwise about the origin?



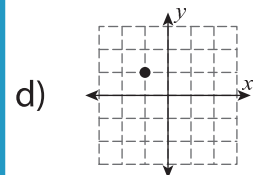
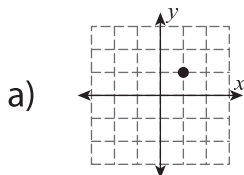
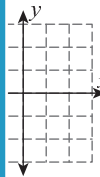
3) What will be the new position of the given point after rotating 180° about the origin?

PREVIEW
Gain complete access to the largest collection of worksheets in all subjects!

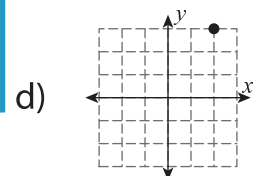
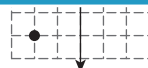
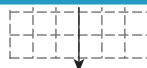
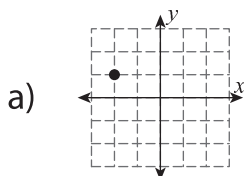
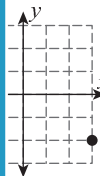
Members, please log in to download this worksheet.

Not a member? Please sign up to gain complete access.

www.mathworksheets4kids.com



4) What will be the new position of the given point after rotating 90° clockwise about the origin?



5) What will be the new position of the given point after rotating 90° clockwise about the origin?

