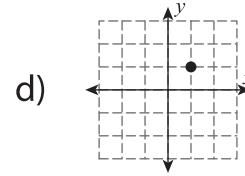
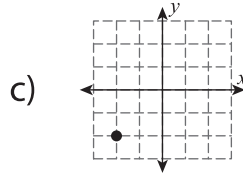
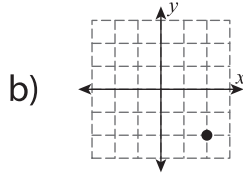
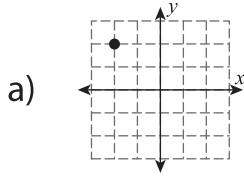
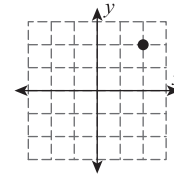
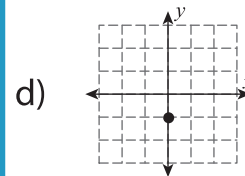
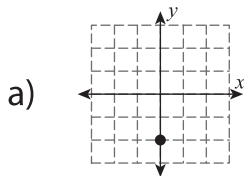
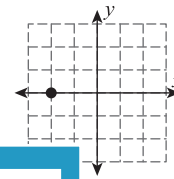


Multiple Choice

1) What will be the new position of the given point after rotating 90° clockwise about the origin?

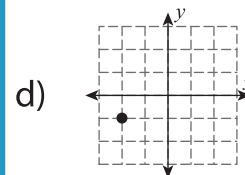
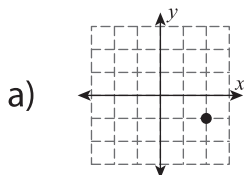
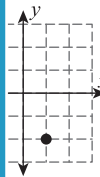


2) What will be the new position of the given point after rotating 90° counterclockwise about the origin?



3) What will be the new position of the given point after rotating 90° clockwise about the origin?

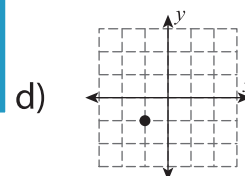
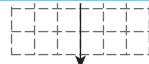
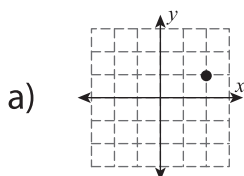
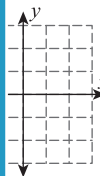
Gain complete access to the largest collection of worksheets in all subjects!



4) What will be the new position of the given point after rotating 180° about the origin?

Members, please log in to download this worksheet.

Not a member? Please sign up to gain complete access.



5) What will be the new position of the given point after rotating 90° counterclockwise about the origin?

