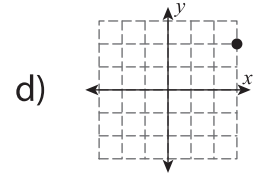
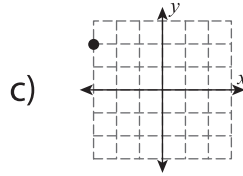
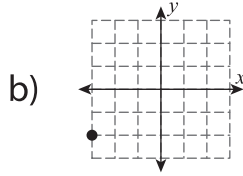
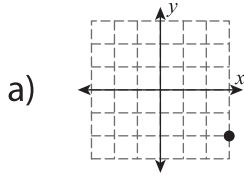
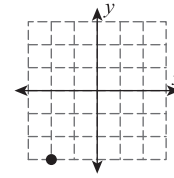
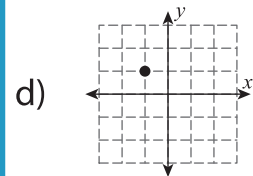
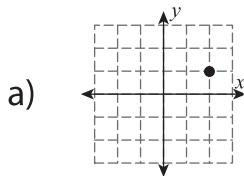
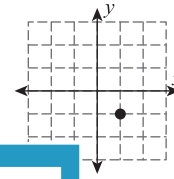


Multiple Choice

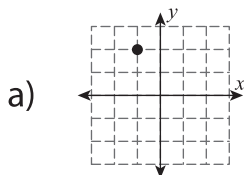
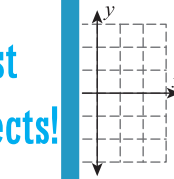
1) What will be the new position of the given point after rotating 90° counterclockwise about the origin?



2) What will be the new position of the given point after rotating 180° about the origin?

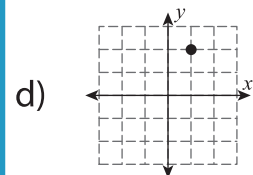


3) What will be the new position of the given point after rotating 90° clockwise about the origin?

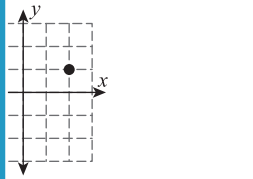
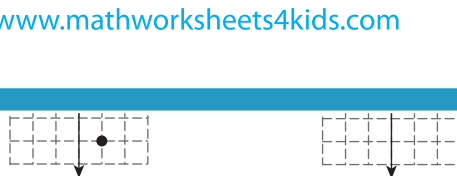
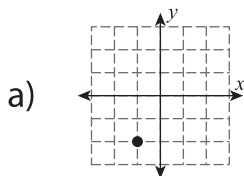
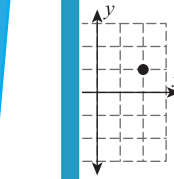


Members, please log in to download this worksheet.

Not a member? Please sign up to gain complete access.



4) What will be the new position of the given point after rotating 90° clockwise about the origin?



5) What will be the new position of the given point after rotating 180° about the origin?

