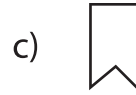
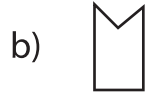
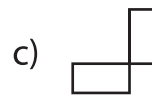
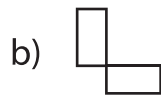
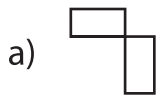


Rotation of Shapes - Multiple Choice

1) Which one of the following is a 90° clockwise rotation of  about the origin?



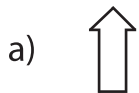
2) Which one of the following is a 90° counterclockwise rotation of  about the origin?



3) Which one of the following is a 90° clockwise rotation of  about the origin?



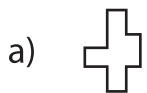
4) Which one of the following is a 90° counterclockwise rotation of  about the origin?



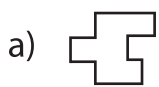
5) Which one of the following is a 90° clockwise rotation of  about the origin?



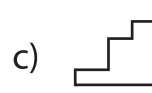
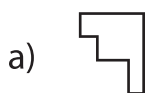
6) Which one of the following is a 90° clockwise rotation of  about the origin?



7) Which one of the following is a 90° counterclockwise rotation of  about the origin?



8) Which one of the following is a 90° clockwise rotation of  about the origin?



PREVIEW

Gain complete access to the largest collection of worksheets in all subjects!

Members, please log in to download this worksheet.

Not a member? Please sign up to gain complete access.

www.mathworksheets4kids.com