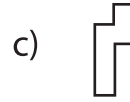
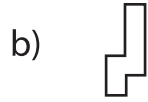


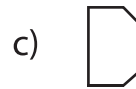
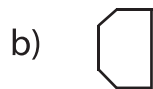
## Rotation of Shapes - Multiple Choice

Sheet 2

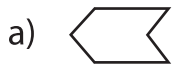
1) Which one of the following is a  $180^\circ$  rotation of  about the origin?



2) Which one of the following is a  $90^\circ$  clockwise rotation of  about the origin?



3) Which one of the following is a  $90^\circ$  clockwise rotation of  about the origin?



4) Which one of the following is a  $90^\circ$  counter-clockwise rotation of  about the origin?



5) Which one of the following is a  $90^\circ$  clockwise rotation of  about the origin?



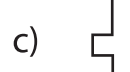
6) Which one of the following is a  $90^\circ$  counter-clockwise rotation of  about the origin?



7) Which one of the following is a  $180^\circ$  rotation of  about the origin?



8) Which one of the following is a  $90^\circ$  counter-clockwise rotation of  about the origin?



# PREVIEW

Gain complete access to the largest  
collection of worksheets in all subjects!

Members, please  
log in to  
download this  
worksheet.

Not a member?  
Please sign up to  
gain complete  
access.

[www.mathworksheets4kids.com](http://www.mathworksheets4kids.com)