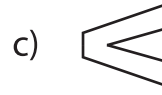
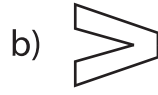



Rotation of Shapes - Multiple Choice

Sheet 3

1) Which one of the following is a 90° counterclockwise rotation of  about the origin?



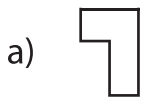
2) Which one of the following is a 180° rotation of  about the origin?



3) Which one of the following is a 90° clockwise rotation of  about the origin?



4) Which one of the following is a 90° clockwise rotation of  about the origin?



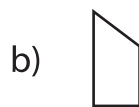
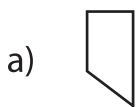
5) Which one of the following is a 90° clockwise rotation of  about the origin?



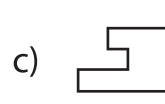
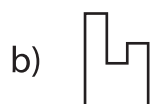
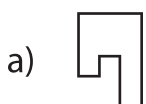
6) Which one of the following is a 90° clockwise rotation of  about the origin?



7) Which one of the following is a 90° clockwise rotation of  about the origin?



8) Which one of the following is a 180° rotation of  about the origin?



PREVIEW

Gain complete access to the largest
collection of worksheets in all subjects!

Members, please
log in to
download this
worksheet.

Not a member?
Please sign up to
gain complete
access.

www.mathworksheets4kids.com