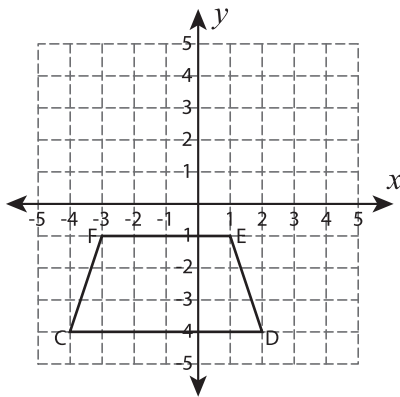


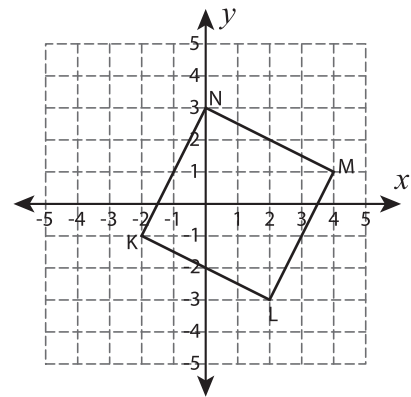
Rotate the Quadrilaterals

Graph the image of each quadrilateral after rotating it about the origin.

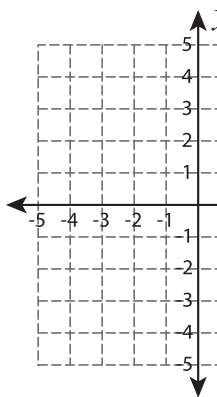
1) 90° counterclockwise rotation



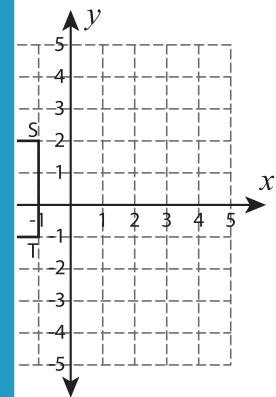
2) 180° rotation



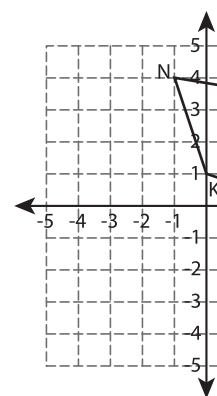
3) 90° clockwise rotation



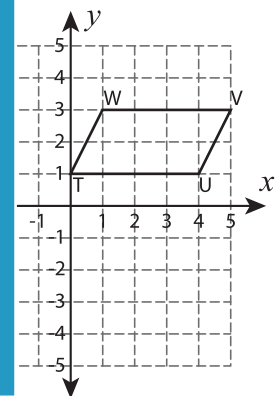
4) 90° counterclockwise rotation



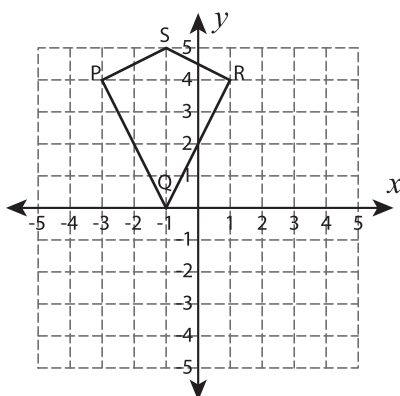
5) 180° rotation



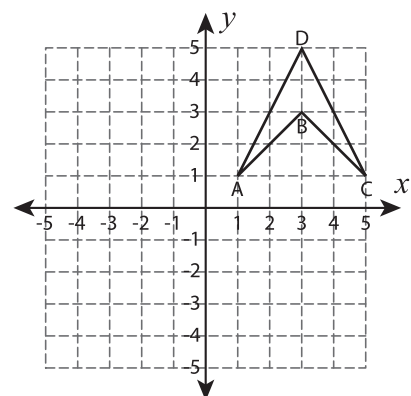
6) 180° rotation



7) 90° counterclockwise rotation



8) 180° rotation



PREVIEW

Gain complete access to the largest collection of worksheets in all subjects!

Members, please log in to download this worksheet.

Not a member? Please sign up to gain complete access.

www.mathworksheets4kids.com