
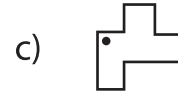




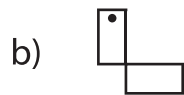
Horizontal and Vertical Flip

Sheet 2

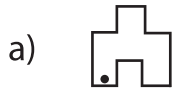
1) Which of the following is a vertical flip of  ?



2) Which of the following is a horizontal flip of  ?



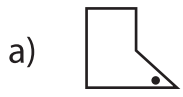
3) Which of the following is a vertical flip of  ?



4) Which of the following is a horizontal flip of  ?




5) Which of the following is a vertical flip of  ?




6) Which of the following is a vertical flip of  ?



7) Which of the following is a vertical flip of  ?



8) Which of the following is a horizontal flip of  ?



PREVIEW

Gain complete access to the largest collection of worksheets in all subjects!

Members, please log in to download this worksheet.

Not a member? Please sign up to gain complete access.

www.mathworksheets4kids.com