
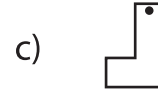
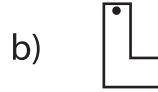
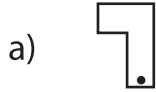



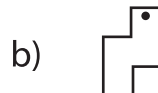
## Horizontal and Vertical Flip

Sheet 3

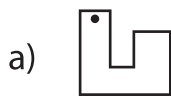
1) Which of the following is a horizontal flip of  ?



2) Which of the following is a horizontal flip of  ?



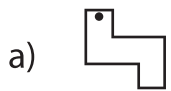
3) Which of the following is a horizontal flip of  ?



4) Which of the following is a horizontal flip of  ?




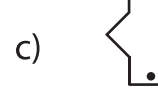
5) Which of the following is a horizontal flip of  ?




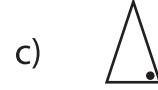
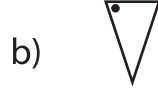
6) Which of the following is a horizontal flip of  ?



7) Which of the following is a vertical flip of  ?



8) Which of the following is a vertical flip of  ?



# PREVIEW

Gain complete access to the largest collection of worksheets in all subjects!

Members, please log in to download this worksheet.

Not a member? Please sign up to gain complete access.

[www.mathworksheets4kids.com](http://www.mathworksheets4kids.com)