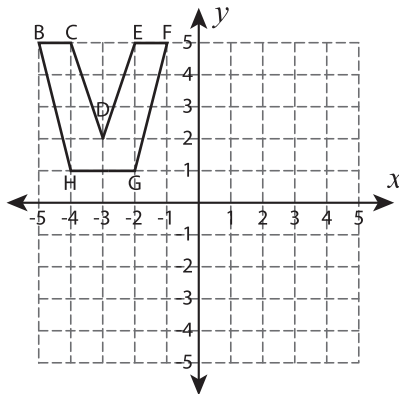


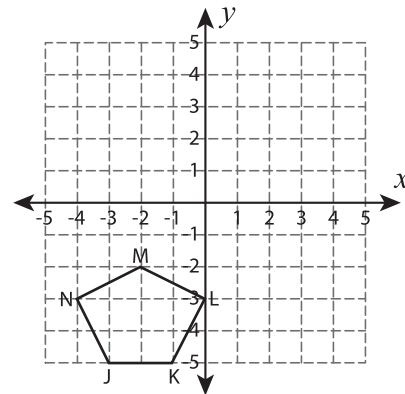
Transform the Shapes

Graph the image of each shape after the given transformation.

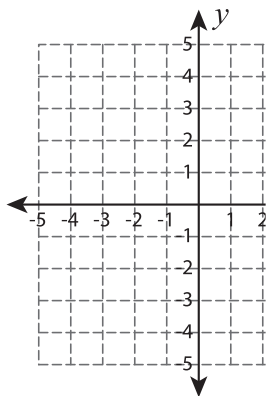
1) 90° clockwise rotation about the origin



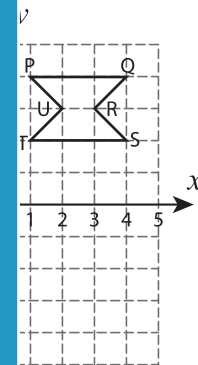
2) Translate 3 units up and 5 units right



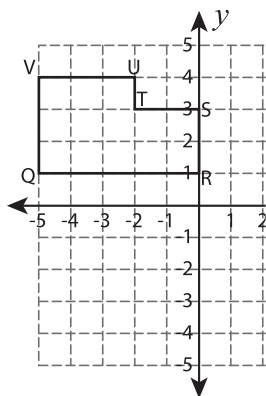
3) Reflection across the line $y = 2$



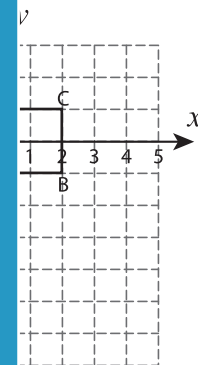
4) 90° counter-clockwise rotation about the origin



5) Translate 4 units down



6) Reflection across the line $y = -2$



PREVIEW

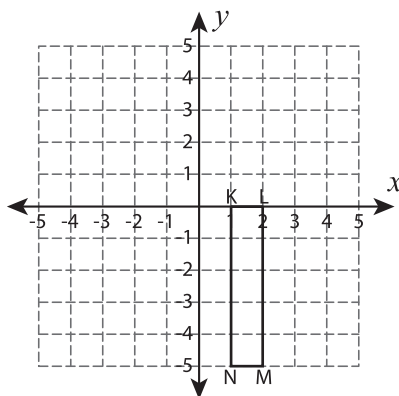
Gain complete access to the largest collection of worksheets in all subjects!

Members, please log in to download this worksheet.

Not a member? Please sign up to gain complete access.

www.mathworksheets4kids.com

7) 90° counterclockwise rotation about the origin



8) Translate 6 units left and 2 units down

