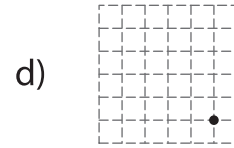
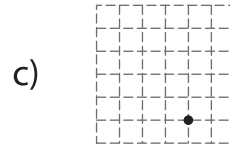

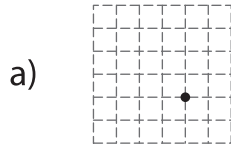
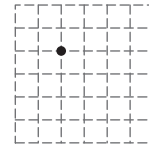


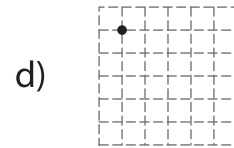
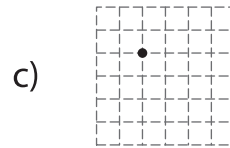
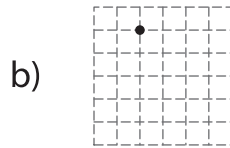
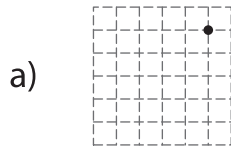
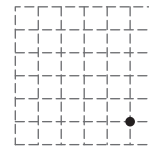
Multiple Choice

Sheet 1

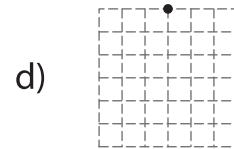
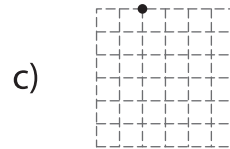

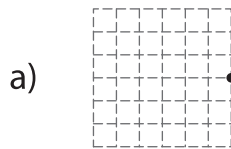
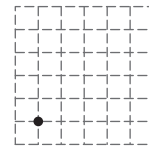
- 1) What will be the new position of the given point after translation of 3 units right and 2 units down?



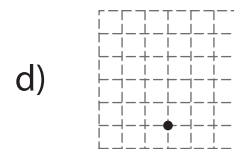
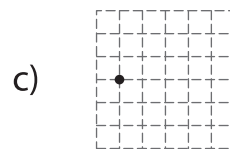


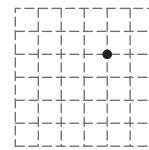
- 2) What will be the new position of the given point after translation of 4 units left and 4 units up?



- 3) What will be the new position of the given point after translation of 2 units up and 5 units right?



- 4) What will be the new position of the given point after translation of 1 unit down and 3 units left?



- 5) What will be the new position of the given point after translation of 4 units right and 1 unit up?

