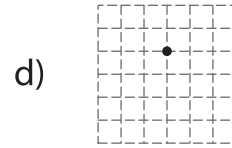
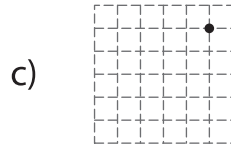
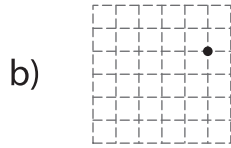
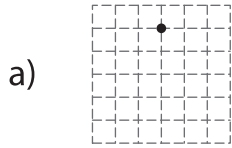
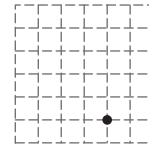
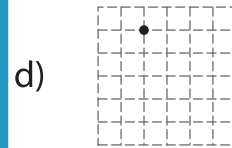
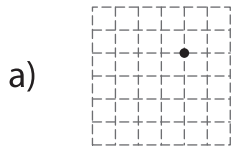
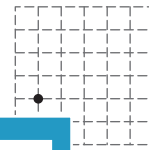


Multiple Choice

1) What will be the new position of the given point after translation of 4 units up and 1 unit right?

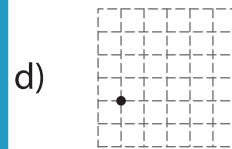
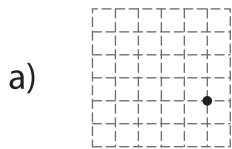
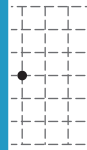


2) What will be the new position of the given point after translation of 2 units right and 3 units up?



3) What will be the new position of the given point after translation of 1 unit right and 2 units up?

PREVIEW
Gain complete access to the largest collection of worksheets in all subjects!

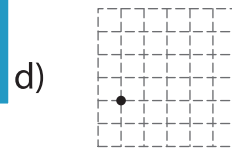
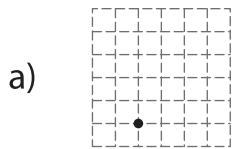
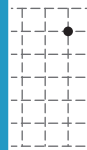


4) What will be the new position of the given point after translation of 3 units right and 1 unit up?

Members, please log in to download this worksheet.

Not a member? Please sign up to gain complete access.

www.mathworksheets4kids.com



5) What will be the new position of the given point after translation of 5 units up and 2 units left?

