

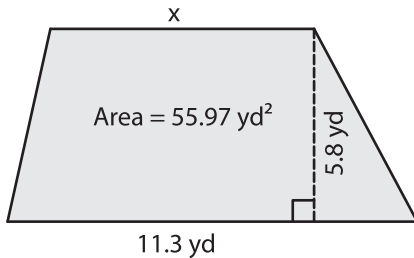
Name : _____

Trapezoid - Area

Sheet 3

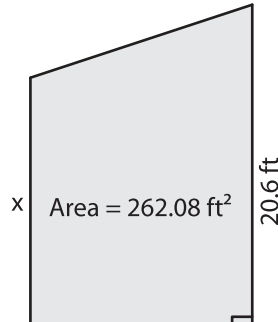
Find x.

1)

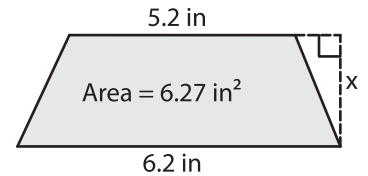


x = _____

2)

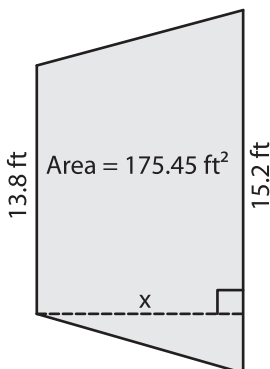


3)



x = _____

4)



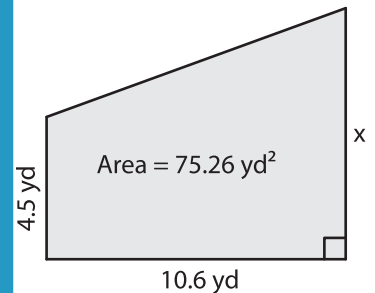
x = _____

Gain complete access to the largest collection of worksheets in all subjects!

Members, please log in to download this worksheet.

Not a member? Please sign up to gain complete access.

www.mathworksheets4kids.com



x = _____

7) The area of a trapezoid bases, if the sum of the

r distance between the

8) The height of a trapezoid is 7.2 feet and one of the parallel bases is of length 9.1 feet. Find the other parallel base, if the area of the trapezoid is 92.88 square feet.