

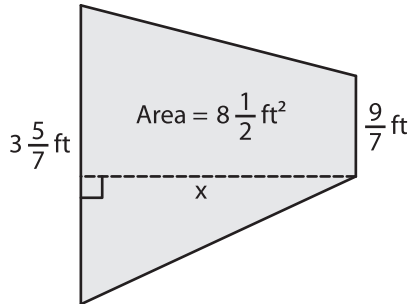
Name : \_\_\_\_\_

## Trapezoid - Area

Sheet 3

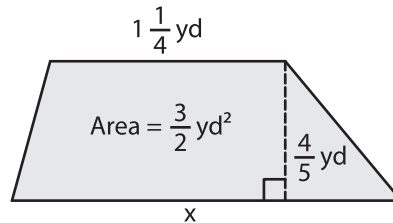
Find x.

1)

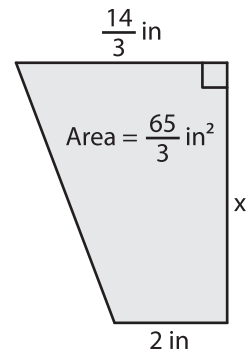


x = \_\_\_\_\_

2)

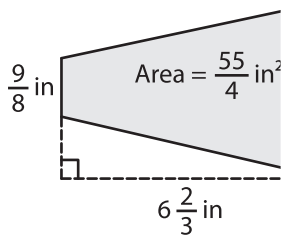


3)



x = \_\_\_\_\_

4)



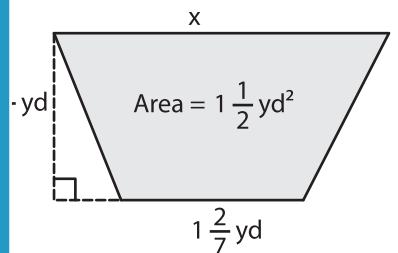
x = \_\_\_\_\_

Gain complete access to the largest collection of worksheets in all subjects!

Members, please log in to download this worksheet.

Not a member? Please sign up to gain complete access.

[www.mathworksheets4kids.com](http://www.mathworksheets4kids.com)



x = \_\_\_\_\_

7) The area of a trapezoid if the lengths of the bases are \_\_\_\_\_ and the distance between the bases, \_\_\_\_\_

\_\_\_\_\_

8) A trapezoid has an area of  $10\frac{8}{9}$  square inches. If the height of the trapezoid is  $\frac{7}{2}$  inches and one of the parallel bases is  $5\frac{1}{3}$  inches, find the other base.