

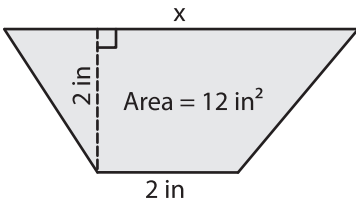
Name : _____

Trapezoid - Area

L1S2

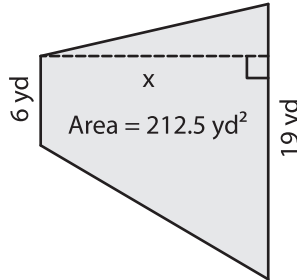
Find x.

1)

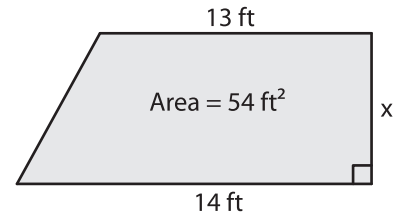


x = _____

2)

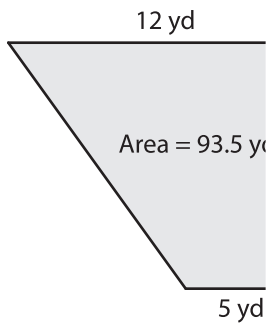


3)



x = _____

4)



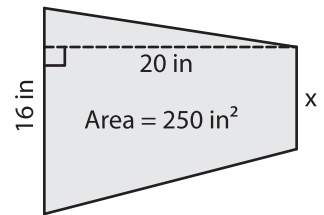
x = _____

PREVIEW
Gain complete access to the largest collection of worksheets in all subjects!

Members, please log in to download this worksheet.

Not a member? Please sign up to gain complete access.

www.mathworksheets4kids.com



x = _____

7) The area of a trapezoid is 100 square yards. The sum of the bases is 40 yards. Find the distance between the bases, if the height of the trapezoid is 5 yards.

8) The height of a trapezoid is 1 yard and one of the parallel bases is of length 10 yards. Find the length of the other parallel base, if the area of the trapezoid is 9.5 square yards.
