

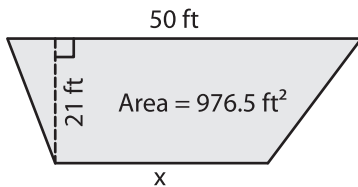
Name : _____

Trapezoid - Area

L2S2

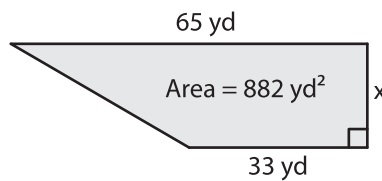
Find x.

1)



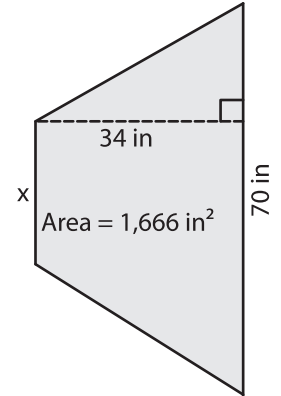
x = _____

2)

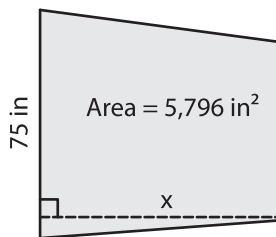


x = _____

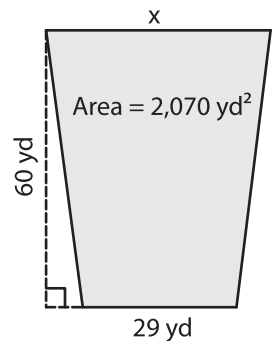
3)



4)



x = _____



x = _____

7) The height of a trapezoid is 46 yards. Find the other parallel base, if the area is 10,220 square yards.

8) The height of a trapezoid is 46 yards. Find the other parallel base, if the area is 10,220 square yards.

PREVIEW

Gain complete access to the largest collection of worksheets in all subjects!

Members, please log in to download this worksheet.

Not a member? Please sign up to gain complete access.

www.mathworksheets4kids.com

8) The sum of the parallel bases of a trapezoid is 39 inches. If the area of the trapezoid is 604.5 square inches, determine the height.