

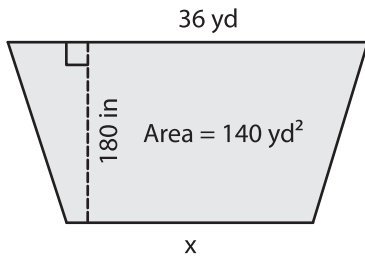
Name : _____

Trapezoid - Area

Sheet 1

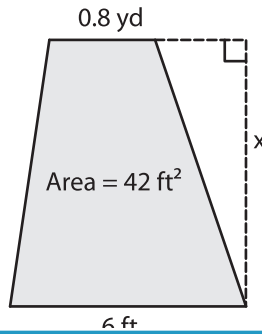
Find x.

1)

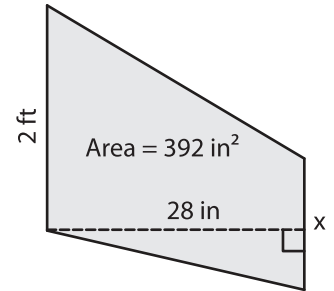


x = _____ yd

2)

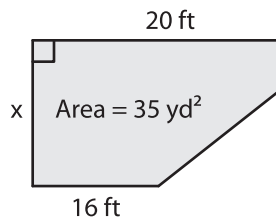


3)



x = _____ in

4)



x = _____ ft

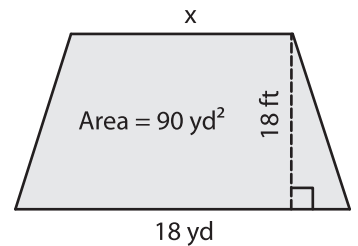
PREVIEW

Gain complete access to the largest collection of worksheets in all subjects!

Members, please log in to download this worksheet.

Not a member? Please sign up to gain complete access.

www.mathworksheets4kids.com



x = _____ yd

7) A trapezoid has an area of 180 square feet and one of the parallel bases is 22 yard

18 feet and one of the

8) The area of a trapezoid is 2,160 square inches. Find the height of the trapezoid in feet, if the sum of the parallel bases is 30 feet.