

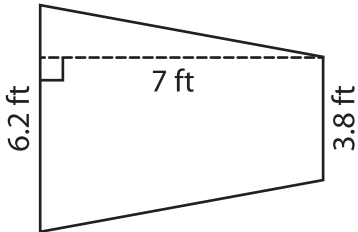
Name : _____

Trapezoid – Area

T2S1

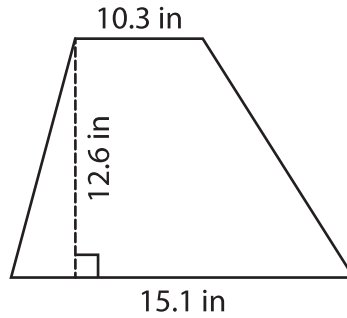
Find the area of each trapezoid. Round your answer to two decimal places.

1)

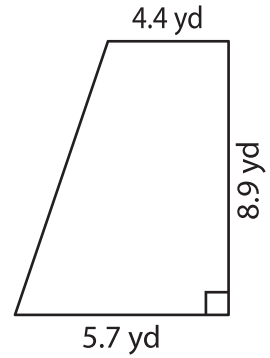


Area = _____

2)

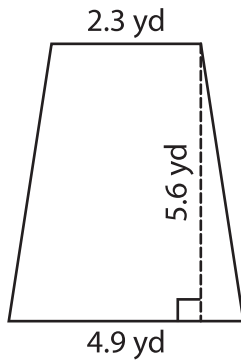


3)



Area = _____

4)



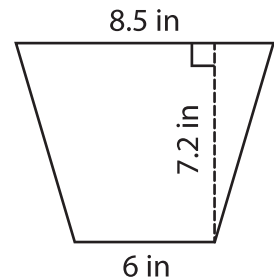
Area = _____

PREVIEW
Gain complete access to the largest collection of worksheets in all subjects!

Members, please log in to download this worksheet.

Not a member? Please sign up to gain complete access.

www.mathworksheets4kids.com



Area = _____

7) The sum of the bases are _____ and the area of the trapezoid is _____.

_____ and _____ respectively. Determine the area.

8) The height of a trapezoid is 4.3 yards. If the lengths of the parallel bases are 3.8 yards and 5.4 yards, what is the area of the trapezoid?