

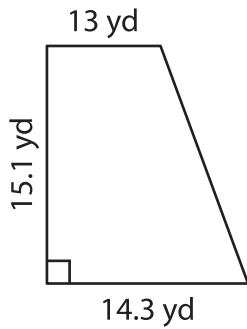
Name : \_\_\_\_\_

## Trapezoid – Area

T2S2

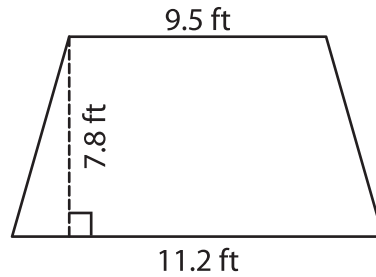
Find the area of each trapezoid. Round your answer to two decimal places.

1)



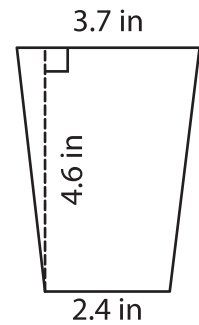
Area = \_\_\_\_\_

2)



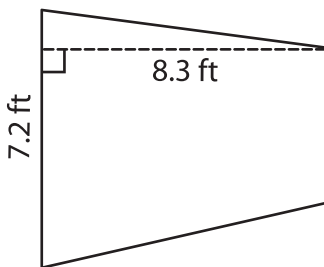
Area = \_\_\_\_\_

3)



Area = \_\_\_\_\_

4)



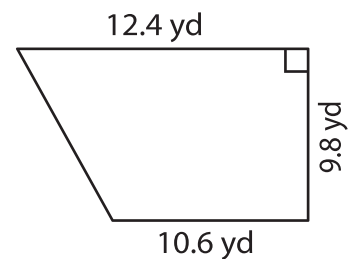
Area = \_\_\_\_\_

Gain complete access to the largest collection of worksheets in all subjects!

Members, please log in to download this worksheet.

Not a member? Please sign up to gain complete access.

[www.mathworksheets4kids.com](http://www.mathworksheets4kids.com)



Area = \_\_\_\_\_

7) The lengths of the parallel bases of a trapezoid are 10.5 cm and 15.2 cm. If the height is 6.8 cm, find the area of the trapezoid.

What is the area of the

8) The parallel bases of a trapezoid measure 3.4 inches and 7.1 inches. If the perpendicular distance between the bases is 5.5 inches, find the area of the trapezoid.