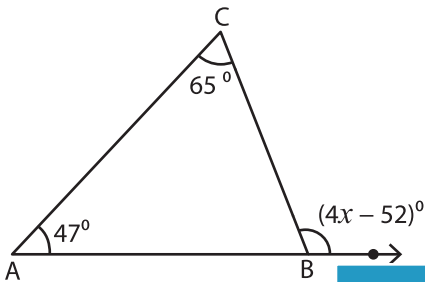


Triangle - Exterior Angles

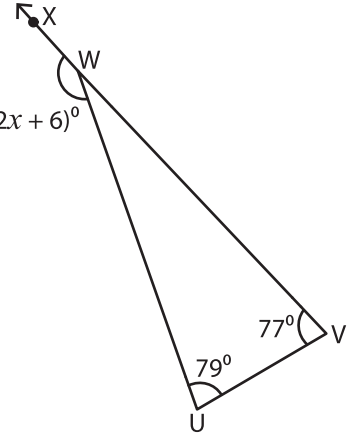
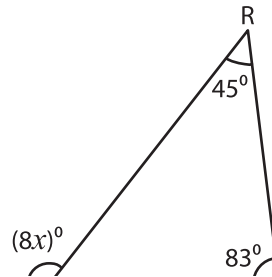
Find the value of x in each triangle.

1)



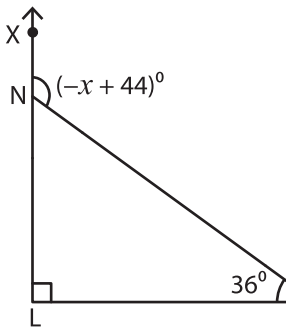
$x =$ _____

2)



$x =$ _____

4)



$x =$ _____

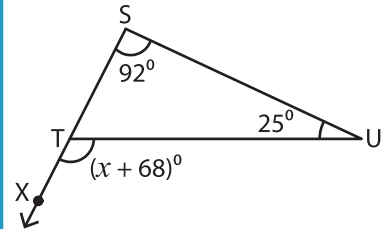
PREVIEW

Gain complete access to the largest collection of worksheets in all subjects!

Members, please log in to download this worksheet.

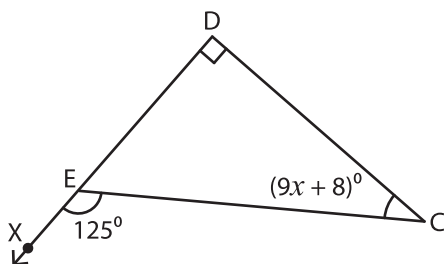
Not a member? Please sign up to gain complete access.

www.mathworksheets4kids.com

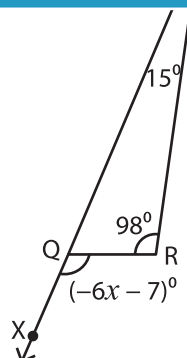


$x =$ _____

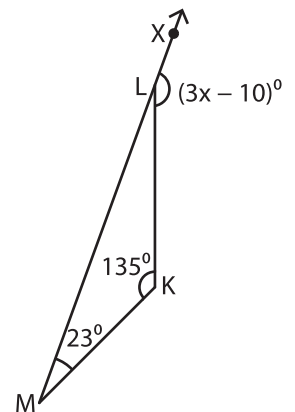
7)



$x =$ _____



$x =$ _____



$x =$ _____