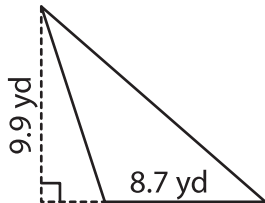


Name : _____

Area of a Triangle

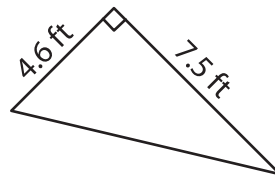
A) Find the area of each triangle. Round your answer to two decimal places.

1)



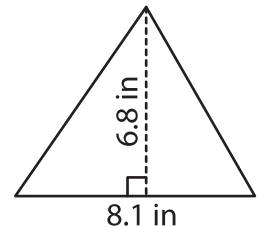
Area = _____

2)



Area = _____

3)



B) Find the area of each triangle.

4) base = 14.5 yd , height = 10.2 yd

Area = _____

Area = _____

Area = _____

6) base = 5.4 in , height = 3.2 yd

Area = _____

Area = _____

8) Find the area of a triangle with base 12.5 cm and height 8.2 cm.

9) The base of a triangle is 6.3 inches. What is the area of the triangle, if the height is 5.6 inches?

PREVIEW

Gain complete access to the largest collection of worksheets in all subjects!

Members, please log in to download this worksheet.

Not a member? Please sign up to gain complete access.

www.mathworksheets4kids.com