

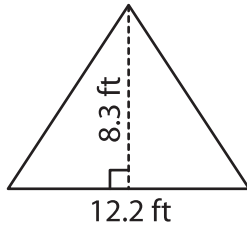
Name : _____

T2S4

Area of a Triangle

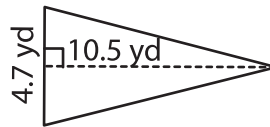
A) Find the area of each triangle. Round your answer to two decimal places.

1)



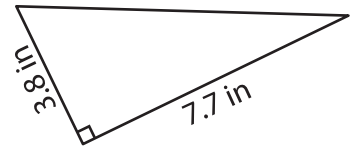
Area = _____

2)



Area = _____

3)



B) Find the area of each triangle.

4) base = 5.6 ft , height = 1.2 ft

Area = _____

9.8 in

Area = _____

6) base = 12.7 in , height = 1.7 yd

1.7 yd

Area = _____

8) Find the area of a triangle with a base of 10.5 yd and a height of 4.7 yd.

PREVIEW

Gain complete access to the largest collection of worksheets in all subjects!

Members, please log in to download this worksheet.

Not a member? Please sign up to gain complete access.

www.mathworksheets4kids.com

9) The height and base of a triangle are 2.6 inches and 7.9 inches respectively. Determine the area of the triangle.
