

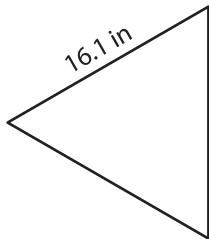
Name : \_\_\_\_\_

T2S2

## Area of an Equilateral Triangle

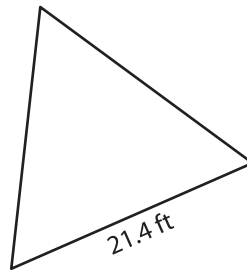
A) Find the area of each equilateral triangle. Round your answer to two decimal places.

1)

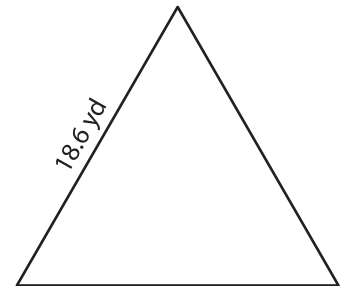


Area = \_\_\_\_\_

2)



3)



Area = \_\_\_\_\_

B) Find the area of each equilateral triangle. Round your answer to two decimal places.

4) side length = 11.9 ft

Area = \_\_\_\_\_

6) side length = 13.2 yd

Area = \_\_\_\_\_

8) Find the area of an equilateral triangle with a side length of 10.5 ft.

\_\_\_\_\_

9) The side length of an equilateral triangle is 9.3 yards. Determine the area of the equilateral triangle.

\_\_\_\_\_

**PREVIEW**

Gain complete access to the largest collection of worksheets in all subjects!

Members, please log in to download this worksheet.

Not a member? Please sign up to gain complete access.

[www.mathworksheets4kids.com](http://www.mathworksheets4kids.com)