

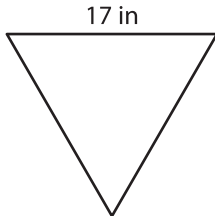
Name : \_\_\_\_\_

T2S1

## Area of an Equilateral Triangle

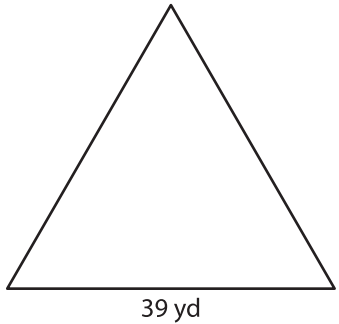
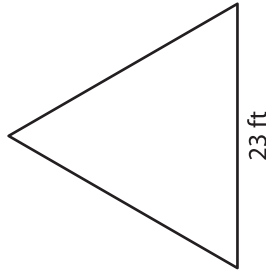
A) Find the area of each equilateral triangle. Round your answer to two decimal places.

1)



Area = \_\_\_\_\_

2)



Area = \_\_\_\_\_

B) Find the area of each equilateral triangle. Round your answer to two decimal places.

4) side length = 5 ft

Area = \_\_\_\_\_

6) side length = 20 yd

Area = \_\_\_\_\_

8) The side length of an equilateral triangle is 10 ft.

Find the area of the equilateral triangle.

\_\_\_\_\_

9) Find the area of an equilateral triangle whose side length is 12 yards.

\_\_\_\_\_

**PREVIEW**

Gain complete access to the largest collection of worksheets in all subjects!

Members, please log in to download this worksheet.

Not a member? Please sign up to gain complete access.

[www.mathworksheets4kids.com](http://www.mathworksheets4kids.com)