

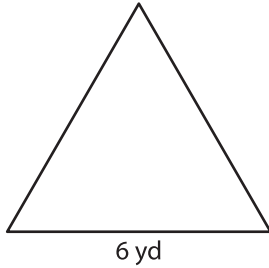
Name : _____

T2S3

Area of an Equilateral Triangle

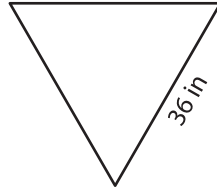
A) Find the area of each equilateral triangle. Round your answer to two decimal places.

1)



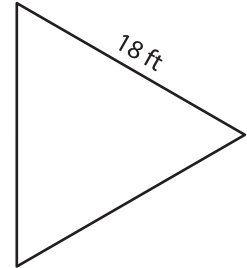
Area = _____

2)



Area = _____

3)



B) Find the area of each equilateral triangle. Round your answer to two decimal places.

4) side length = 22 in

Area = _____

6) side length = 51 ft

Area = _____

8) What is the area of the equilateral triangle with side length 10 cm?

9) The side length of an equilateral triangle is 11 feet. Determine the area of the equilateral triangle.

PREVIEW

Gain complete access to the largest collection of worksheets in all subjects!

Members, please log in to download this worksheet.

Not a member? Please sign up to gain complete access.

www.mathworksheets4kids.com