

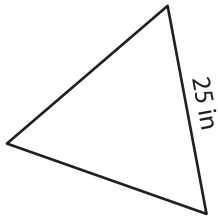
Name : _____

T2S4

Area of an Equilateral Triangle

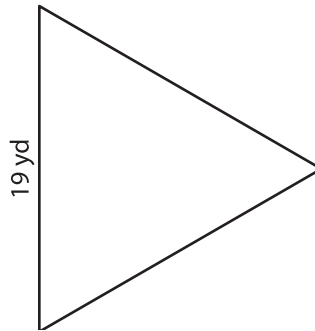
A) Find the area of each equilateral triangle. Round your answer to two decimal places.

1)



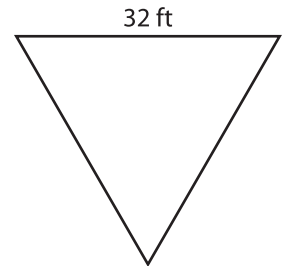
Area = _____

2)



Area = _____

3)



B) Find the area of each equilateral triangle. Round your answer to two decimal places.

4) side length = 16 yd

Area = _____

6) side length = 30 ft

Area = _____

8) The side length of an equilateral triangle is 15 m.

Round your answer to two decimal places.

Find the area of the equilateral triangle.

PREVIEW

Gain complete access to the largest collection of worksheets in all subjects!

Members, please log in to download this worksheet.

Not a member? Please sign up to gain complete access.

www.mathworksheets4kids.com

9) What is the area of the equilateral triangle, if the side length is 27 yards?
