

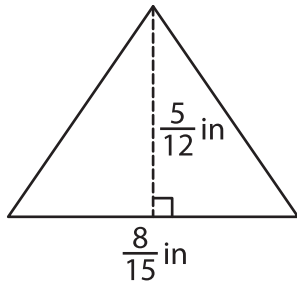
Name : \_\_\_\_\_

T2S1

## Area of a Triangle

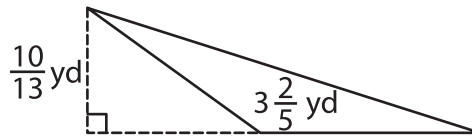
A) Find the area of each triangle.

1)

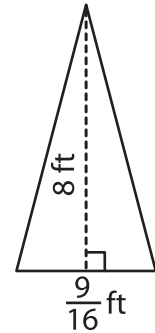


Area = \_\_\_\_\_

2)



3)



Area = \_\_\_\_\_

B) Find the area of each triangle.

4) base =  $7\frac{1}{9}$  yd, height = \_\_\_\_\_ in

Area = \_\_\_\_\_

6) base =  $\frac{4}{7}$  ft, height =  $\frac{7}{1}$  \_\_\_\_\_

Area = \_\_\_\_\_

8) Find the area of the triangle. \_\_\_\_\_ es.

**PREVIEW**

Gain complete access to the largest collection of worksheets in all subjects!

Members, please log in to download this worksheet.

Not a member? Please sign up to gain complete access.

[www.mathworksheets4kids.com](http://www.mathworksheets4kids.com)

9) The base and height of a triangle are  $\frac{19}{20}$  foot and  $2\frac{6}{17}$  feet respectively. Determine the area of the triangle.

\_\_\_\_\_