

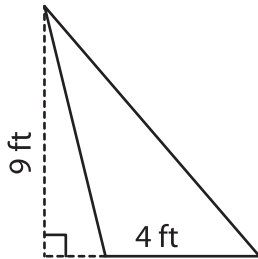
Name : _____

T2L1S1

Area of a Triangle

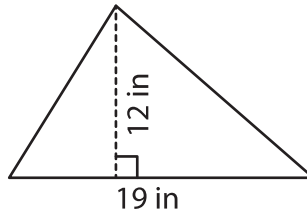
A) Find the area of each triangle.

1)



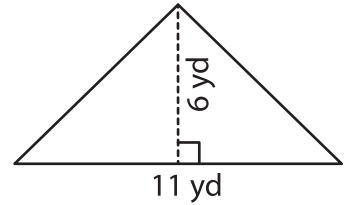
Area = _____

2)



Area = _____

3)



B) Find the area of each triangle.

4) base = 3 yd , height = 8

ft

Area = _____

6) base = 17 in , height = 1

yd

Area = _____

8) The base and height of

_____ find the area of the triangle.

PREVIEW

Gain complete access to the largest collection of worksheets in all subjects!

Members, please log in to download this worksheet.

Not a member? Please sign up to gain complete access.

www.mathworksheets4kids.com

9) Find the area of a triangle whose base is 11 inches and height is 16 inches.
