

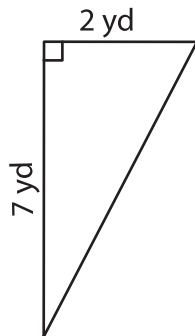
Name : _____

Area of a Triangle

T2L1S4

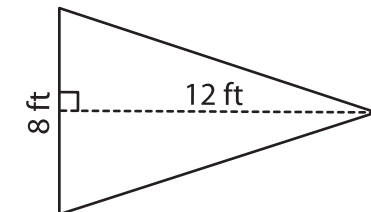
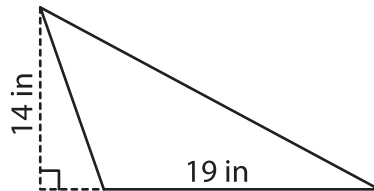
A) Find the area of each triangle.

1)



Area = _____

2)



Area = _____

B) Find the area of each triangle.

4) base = 9 in , height = 20

Area = _____

6) base = 14 ft , height = 8

Area = _____

8) Find the area of a triangle

PREVIEW

Gain complete access to the largest collection of worksheets in all subjects!

Members, please log in to download this worksheet.

Not a member? Please sign up to gain complete access.

www.mathworksheets4kids.com

9) The base and height of a triangle are 6 feet and 8 feet respectively. Find the area of the triangle.
