

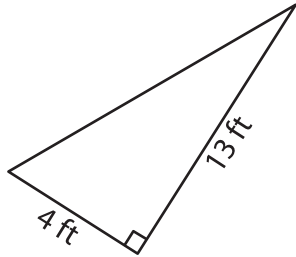
Name : _____

T2L1S5

Area of a Triangle

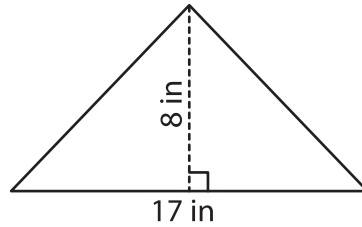
A) Find the area of each triangle.

1)



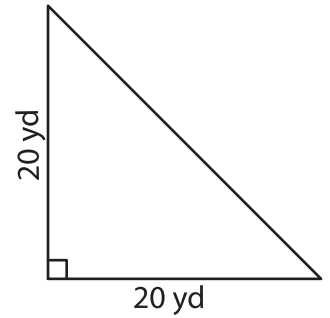
Area = _____

2)



Area = _____

3)



B) Find the area of each triangle.

4) base = 12 ft, height = 9

Area = _____

6) base = 2 yd, height = 1

Area = _____

8) The height of a triangle

base is 7 inches?

PREVIEW

Gain complete access to the largest collection of worksheets in all subjects!

Members, please log in to download this worksheet.

Not a member? Please sign up to gain complete access.

www.mathworksheets4kids.com

9) Determine the area of a triangle, if the height and base of the triangle are 16 feet and 10 feet respectively.
