

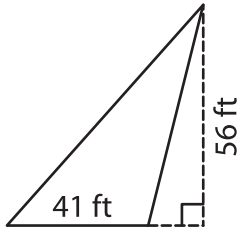
Name : \_\_\_\_\_

## Area of a Triangle

T2L2S2

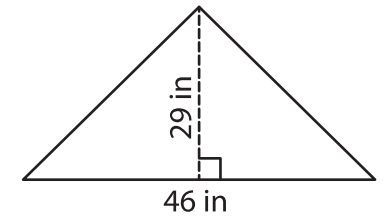
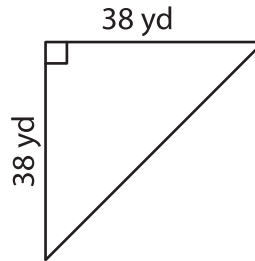
A) Find the area of each triangle.

1)



Area = \_\_\_\_\_

2)



Area = \_\_\_\_\_

B) Find the area of each triangle.

4) base = 25 yd , height = 12 ft

Area = \_\_\_\_\_

6) base = 63 in , height = 5 ft

Area = \_\_\_\_\_

8) Find the area of a triangle with a base of 50 yd and a height of 43 feet respectively.

\_\_\_\_\_

9) The height of a triangle is 62 inches. What is the area of the triangle, if the base is 59 inches?

\_\_\_\_\_

**PREVIEW**

Gain complete access to the largest collection of worksheets in all subjects!

Members, please log in to download this worksheet.

Not a member? Please sign up to gain complete access.

[www.mathworksheets4kids.com](http://www.mathworksheets4kids.com)