

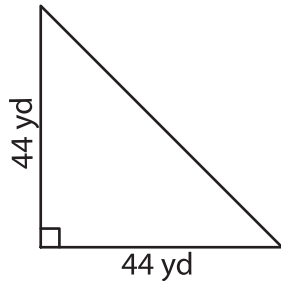
Name : \_\_\_\_\_

T2L2S5

## Area of a Triangle

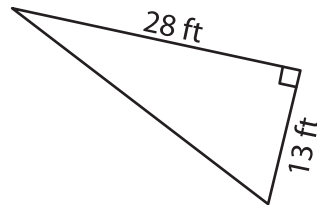
A) Find the area of each triangle.

1)

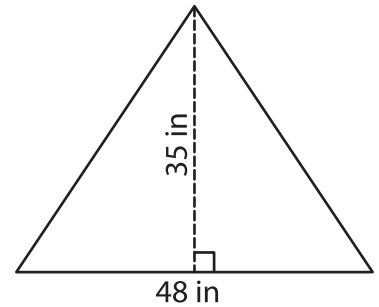


Area = \_\_\_\_\_

2)



3)



Area = \_\_\_\_\_

B) Find the area of each triangle.

4) base = 14 ft , height = 4

Area = \_\_\_\_\_

6) base = 66 yd , height =

Area = \_\_\_\_\_

8) The base of a triangle is

\_\_\_\_\_

9) Determine the area of a triangle, if the base and height of the triangle are 17 feet and 68 feet respectively.

\_\_\_\_\_

**PREVIEW**

Gain complete access to the largest collection of worksheets in all subjects!

Members, please log in to download this worksheet.

Not a member? Please sign up to gain complete access.

[www.mathworksheets4kids.com](http://www.mathworksheets4kids.com)