

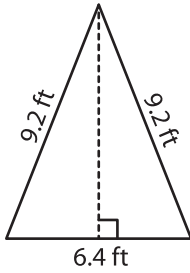
Name : _____

Area of an Isosceles Triangle

T2S3

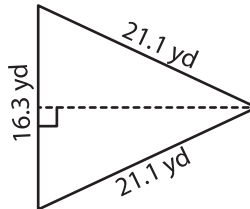
Find the area of each isosceles triangle. Round your answer to two decimal places.

1)

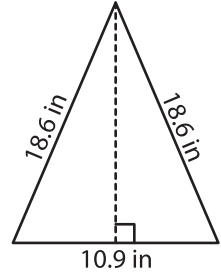


Area = _____

2)

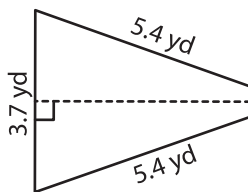


3)



Area = _____

4)



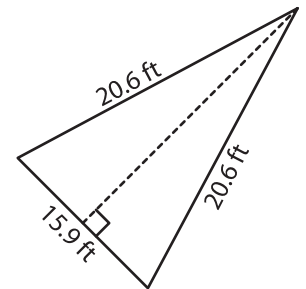
Area = _____

PREVIEW
Gain complete access to the largest collection of worksheets in all subjects!

Members, please log in to download this worksheet.

Not a member? Please sign up to gain complete access.

www.mathworksheets4kids.com



Area = _____

7) The base of an isosceles triangle has a length of 13 inches. The two equal sides measure 10 inches each.

Find the area of the isosceles triangle, if the two equal sides measure 10 inches each.

8) An isosceles triangle has two equal sides of length 22.7 inches each. If the length of the base is 17.3 inches, determine the area of the isosceles triangle.